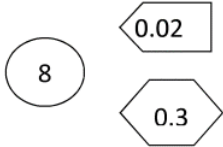

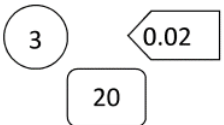
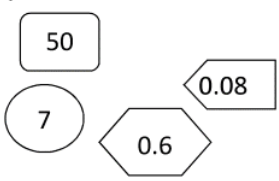
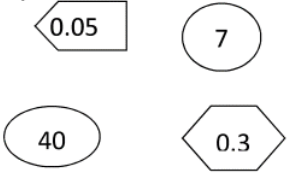
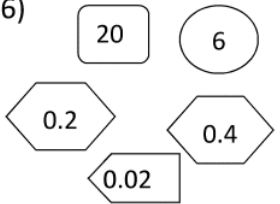


Count the total in each box.

1) 	2) 	3) 
How many?	How many?	How many?
4) 	5) 	6) 
How many?	How many?	How many?
7) 6 ONES + 2 TENTHS + 4 HUNDREDTHS	8) 7 ONES + 3 TENTHS 5 HUNDREDTHS	9) 7 TENTHS + 4 HUNDREDTHS
How many?	How many?	How many?