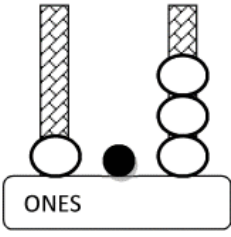
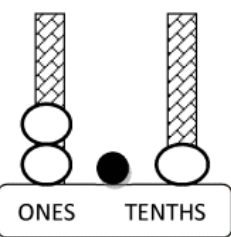
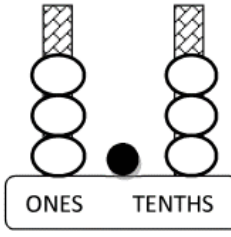
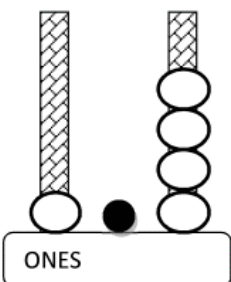
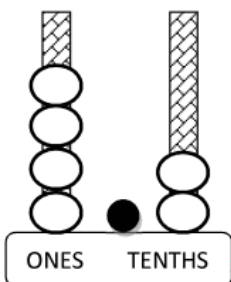
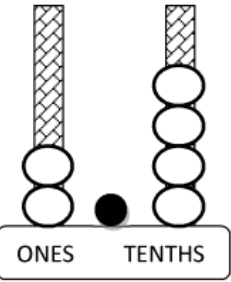


Count the number of ONES and TENTHS and then put them together.

<p>1)</p>  <p>ONES</p>	<p>2)</p>  <p>ONES TENTHS</p>	<p>3)</p>  <p>ONES TENTHS</p>
<p>How many? 1.3</p>	<p>How many?</p>	<p>How many?</p>
 <p>ONES</p>	 <p>ONES TENTHS</p>	 <p>ONES TENTHS</p>
<p>How many?</p>	<p>How many?</p>	<p>How many?</p>
<p>7) 1 ONES + 2 TENTHS</p>	<p>8) 3 ONES + 2 TENTHS</p>	<p>9) 5 ONES + 4 TENTHS</p>
<p>How many?</p>	<p>How many?</p>	<p>How many?</p>