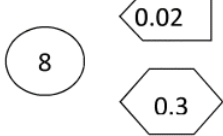

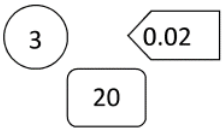
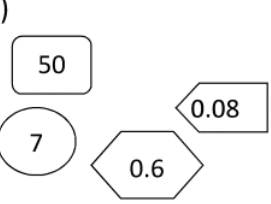
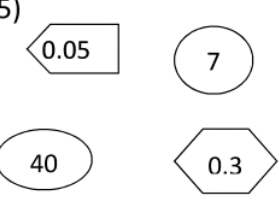
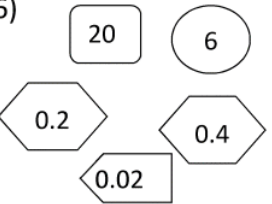


Count the total in each box.

1) 	2) 	3) 
How many?	How many?	How many?
4) 	5) 	6) 
How many?	How many?	How many?
7) 6 ONES + 2 TENTHS + 4 HUNDREDTHS	8) 7 ONES + 3 TENTHS + 5 HUNDREDTHS	9) 7 TENTHS + 4 HUNDREDTHS
How many?	How many?	How many?
10) 8 ONES + 2 TENTHS + 5 HUNDREDTHS	11) 4 TENS + 7 ONES + 2 HUNDREDTHS	12) 1 ONE + 9 TENTHS + 4 HUNDREDTHS
How many?	How many?	How many?
13) 6 TENTHS + 1 ONE + 5 HUNDREDTHS	14) 4 TENTHS + 2 ONES + 6 HUNDREDTHS	15) 9 HUNDREDTHS + 3 ONES + 3 TENTHS
How many?	How many?	How many?
16) 2 TENTHS + 3 ONES + 7 HUNDREDTHS	17) 9 HUNDREDTHS + 5 TENTHS	18) 2 HUNDREDTHS + 7 ONES
How many?	How many?	How many?